



VICTORY STEP EDUCATION SERVICES

PRIMARY LEAVING EXAMINATION BOARD

SUPER MAGIC SET ONE

2022

SOCIAL STUDIES AND RELIGIOUS EDUCATION

Time allowed 2hrs 30 minutes

Index No			Personal No.				

CANDIDATE'S NAME.....

SIGNATURE.....

SCHOOL NAME.....

DISTRICT NAME.....

Read the following instructions carefully

- 1.This paper has two Sections A and B
- 2.Section A has 40 Questions (40marks) and section B has 60 (60marks).
- 3.Attempt all questions in both section A And B.All questions must be written in the spaces provided
- 4.All answers must be written using blue or black ball pen or ink. Only diagrams should be drawn using a pencil
- 5.Unnecessary changes of work may lead to loss of marks
- 6.Do not fill anything in the box with "**EXAMINER'S USE ONLY**"
- 7.All handwriting that cannot easily be read may lead to loss of marks.

FOR EXAMINERS' USE ONLY		
Qn. No.	MARKS	EXRS' IN.
1 – 10		
11 – 20		
21 – 30		
31– 40		
41 – 43		
44 – 46		
47 – 49		
50 – 52		
53– 55		
TOTAL		

SECTION A

All questions in this section carry 40 marks

1. Mention the **highest volcanic mountain** in Uganda.
.....
2. State the compass direction that lies between North East and North.
.....
3. Give **one** reason why the Iteso changed their traditional occupation to mixed farming.
.....
4. Name the first country in West Africa to get her independence from the British.
.....
5. Why is it good for school children to listen and follow the advice that is given to them by their teachers?
.....
6. Give **one** reason why the black people of South Africa did not like the system of a partied in their country.
.....
7. State **one** reason why it is not good to catch fish using illegal nets.
.....
8. Give **one advantage** of encouraging boys and girls to do the same activities in your community.
.....
9. How is pyrethrum useful to the people of East Africa?
.....
10. In which way are cultural leaders useful to the people in your district?
.....
11. State **one** way in which **PIASCY** messages are useful to the children in your school.
.....

12. In which **one way** does heavy rainfall lead to poor transport services in an area.
.....
13. Besides Tororo, mention **one** district in Uganda where limestone is mined.
.....
14. Mention **any one way** of reducing poverty among the people of Uganda today.
.....
15. How did Sir. Gerald Portal lead to the loss of Uganda's Independence?
.....
16. How is a swamp important to the people who make pots?
.....
17. State **one** way in which the government of Uganda is improving on the health services in the country.
.....
18. Give **one** reason why the pastoral trines settle in the drier areas of East Africa.
.....
19. How did the growth of industries in Europe lead to the coming of many European traders to Africa?
.....
20. Give **any one** reason why the Kikuyu people of Kenya participated in the **MAUMAU** rebellion.
.....
21. Name the flag that was replaced by the Uganda National Flag in 1962.
.....
22. State **any one** problem that is associated with carrying out elections in a country.
.....
23. A village covering a total land area of four square kilometers has a population of 16000 people. What is the population density of the village?

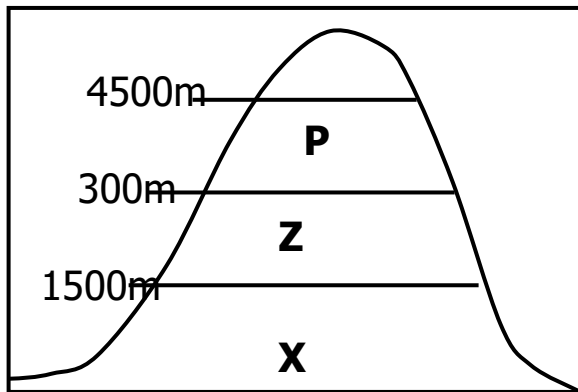
.....
24. Why is smuggling not a good practice of a country's economy?

.....
25. Mention **any one** disadvantage of mobile phones as a means of communication in Uganda.

.....
26. How can the people of East Africa help in the fight against the changes in the climate of their countries?

.....
27. How did South Sudan become a land locked country?

.....
Use the diagram below to answer question No. 28 and 29.



.....
28. Give **one** reason why place **X** is hotter than **P** in the diagram above.

.....
29. Why does area **P** above have less vegetation than Z?

.....
30. Name the African leader who led Democratic Republic of Congo to Independence.

.....
31. State **one** reason why the mining industry of Uganda is still not developed.

32. How was Emperor Haille Selassie important during the formation of the OAU in 1963?

.....

33. Why is it good for your family to have a surplus budget?

.....

34. In which **one** way is the setting up of many radio stations useful to the people of Uganda?

.....

35. Why is Uganda not a member of the ECOWAS?

.....

Answer Either Christianity Or Islamic questions but not both.

36. **Either:** Name **any one** result of disobedience to God.

.....

Or: Name **any one** result of disobedience to Allah.

.....

37. **Either:** State why it is better for the married couple to be of the same religious background in Christianity.

.....

Or: State why it is better for the married couple to be of the same religious background in Islam.

.....

38. **Either:** What happened to Jesus when he was in the garden of Gethsemane?

.....

.....

Or: What happened to Mohammed when he was still in Mecca?

.....

.....

39. **Either:** What do you learn from the Uganda Martyrs?

.....

Or: State **one** effect of the Religious wars between the Christians and the Moslems in Uganda.

.....

40. **Either:** Who gave Mary the mother of Jesus a message about her pregnancy?

.....

Or: Who gave Mariam a message from Allah about her pregnancy?

.....

SECTION B

41.a) Mention **two** Nile valley countries found in Northern Africa.

i)

ii)

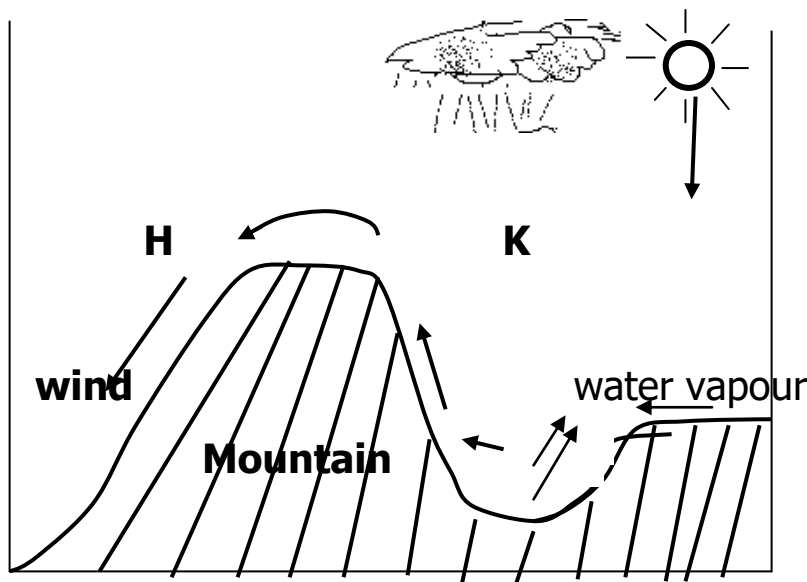
b) Give **one reason** why river Nile flows from Uganda towards South Sudan.

.....

c) Why is the Blue Nile very important in the economic development of Sudan?

.....

Use the diagram below to answer question number 42.



42.a) Name the sides of the above mountain marked **H** and **K**.

.....

b) Why does side **K** receive more rainfall than side **H**?

.....

c) Mention **any one** crop that grows well on the side of the above mountain marked **K**.

.....

43.a) Write the name of the European explorer who named the Murchison falls.

.....

b) State **any two** problems that were faced by early explorers in East Africa.

i)

ii)

c) Give **any one** bad result of explorers in East Africa.

.....

44.a) Mention the main cash crop that is grown in Nigeria.

.....

b) What **one** factor favours the growing of the cash crop you have name in (a) above?

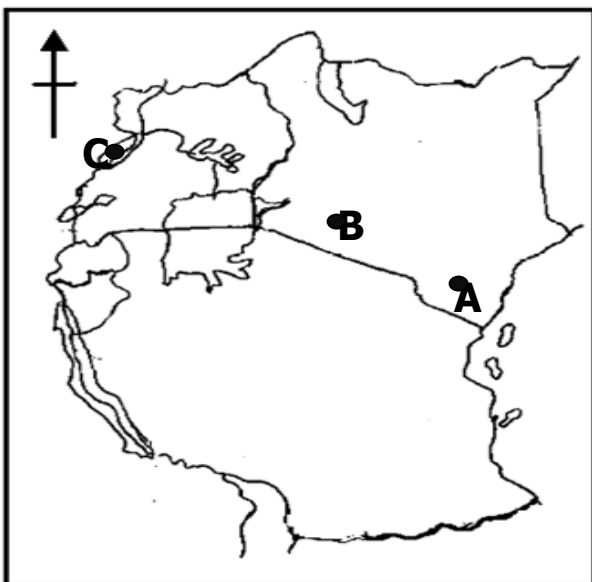
.....

c) Study **any two** problems faced by crop farmers in Africa.

i)

ii)

Study the map of East Africa below and answer the questions that follow.



45.a) Name **one** modern means of transport which can be used to transport petroleum from town **A** to **B**

.....

b) State **any two** advantages of using above mentioned means of transport in East Africa.

i)

ii)

c) State **one** reason why the above named means of transport is not commonly used in the lake marked **C**?

.....

46.a) What name is given to a set of laws that guide the leaders to govern a country well?

.....

b) State **any two** importance of setting and following National laws to the people of Uganda.

i)

ii)

c) Mention **any one** problem a child who does not follow school regulations is likely to face.

.....

47.a) Name the political party that led Kenya to self – rule.

.....

b) State **any two** problems that were faced by the African leaders during the struggle for self – rule.

.....

c) Give **one** lesson that you learn from the African leaders who fought for the independence of their countries.

.....

48.a) What name is given to the people who cut down trees for wood?

.....

b) In which **one** way are the people who you have named in (a) above useful to your school?

.....

c) Mention **two** ways in which your school can help to conserve forests in your community.

i)

ii)

49.a) Write down **one** tribe in Kenya that delayed the building of the Uganda – Kenya railway line.

.....

b) Complete the table below correctly in relation to the building of the Uganda – Kenya railway line.

i) Colonel Patterson:
ii) Sir. George Whitehouse:
iii) Sir. William Mackinnon:

50.a) Name the prevailing winds that bring rainfall to the following parts of Africa.

i) The East African Coast.

.....

ii) Mediterranean lands

.....

b) Why are the Harmattan winds responsible for the hot and dry conditions in some parts of West Africa?

.....

c) In which **one** way are the westerly winds useful to the fruit farmers in Tunisia?

.....

For each of the questions 51 – 55, answer EITHER the Christian OR the Islamic questions but not both. No marks will be awarded to a candidate who attempts both alternatives in a particular number.

51. **Either:** a) Which group of people did Moses rescue from slavery?

.....

b) Give **any two reasons** why God chose Moses to lead the people mentioned above.

i)

ii)

c) How helpful was Aaron on their mission to rescue the people mentioned in (a) above?

.....

Or: a) Which group of people did Musa rescue from slavery?

.....

b) Give **any two reasons** why Allah chose Musa to lead the people mentioned above.

i)

ii)

c) How helpful was Haroon on their mission to rescue the people mentioned in (a) above?

.....

52. **Either:** a) What is meant by tithe?

.....

b) Give **any two** reasons why Christians pay tithe.

i)

ii)

c) How is the payment of tithe similar to paying taxes?

.....

Or: a) What is meant by Zakat?

.....
b) Give **any two** reasons why Muslims pay Zakat.

.....
c) How is the payment of Zakat similar to paying taxes?
.....

53. **Either:** a) Give **any three** reasons why Christians work.

i)

ii)

iii)

b) How is joy created when one does work?
.....

Or: a) Give **any three** reasons why Muslims work.

i)

ii)

iii)

b) How is joy created when a Muslim does work?
.....

54. **Either:** a) Name **any two** of God's angels in Christianity.

i)

ii)

b) Give **one** reason why God created angels.
.....

c) How does God expect us to behave when He sends angels to us?
.....

Or: a) Name **any two** of Allah's angels in Islam.

i)

ii)

b) Give **one** reason why Allah created angels.

.....
c) How does Allah expect us to behave when He sends angels to us?

.....
55. **Either: Are you the King of the Jews?**

a) Who **asked** the above question?

.....
b) Who **was asked** the above question?

.....
c) Why was the above question asked to the person who is named in (b) above.

.....
.....
d) What **things** happened after the two people had completed their conversation?

.....
Or: "They are the enemy, so be aware of them."

a) Whom did Allah refer to as the enemy? ████████ ██████████
████████████████████ ██████████

.....
b) Which chapter in the Qur'an did Allah condemn the above enemy?

.....
c) Give **two** qualities of such enemies Allah referred to in the above chapter.

i)

ii)

END